



What fraction is represented by blue circles ?




What fraction is represented by red circles ?



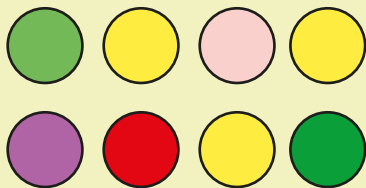
What fraction is represented by yellow circles ?



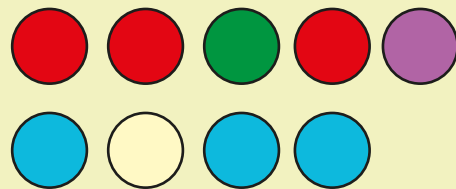
What fraction is represented by black circles ?




What fraction is represented by green circles ?



What fraction is represented by red circles ?



What fraction is represented by blue circles ?



What fraction is represented by orange circles ?

